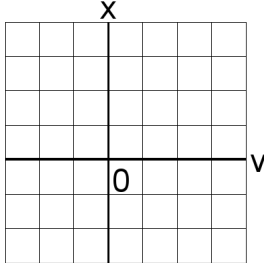


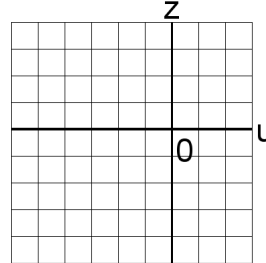
Systemes Linéaires et Graphiques (I)

Trouvez la solution de chaque système d'équations à l'aide du graphique.

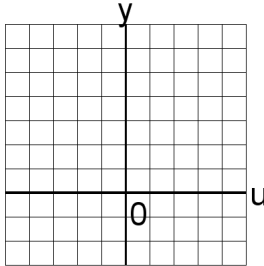
1. $4u + 5x = 34$
 $2u + 5x = 22$



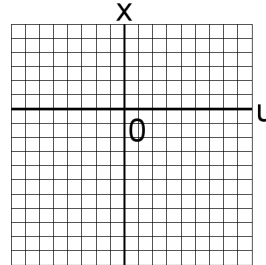
4. $c + x = 9$
 $6c + 2x = 42$



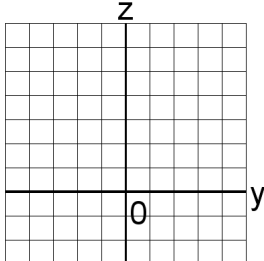
2. $6a + 2z = 20$
 $5a + 5z = 30$



5. $4b + 5v = 50$
 $4b + v = 26$



3. $5a + 5z = 35$
 $5a + 4z = 33$



6. $2v + 3z = 9$
 $2v + 5z = 11$

