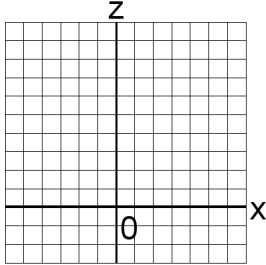


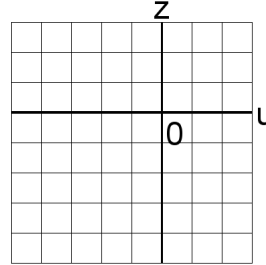
Systèmes Linéaires et Graphiques (H)

Trouvez la solution de chaque système d'équations à l'aide du graphique.

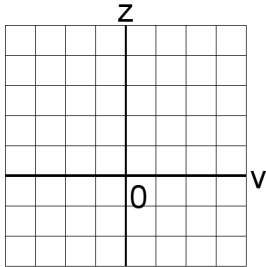
1. $c + 6u = 19$
 $c + u = 4$



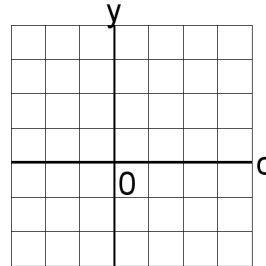
4. $4u + 3v = 7$
 $2u + 4v = 6$



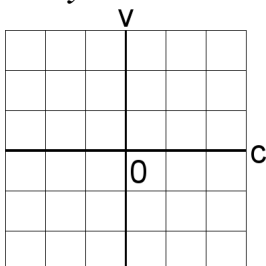
2. $2a + 5v = 24$
 $3a + 6v = 30$



5. $5c + y = 21$
 $5c + 5y = 25$



3. $4u + 5y = 18$
 $5u + y = 12$



6. $6u + 3x = 33$
 $4u + 6x = 42$

