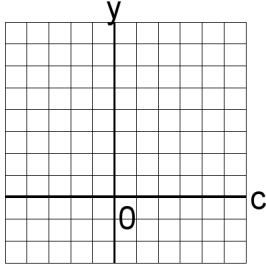


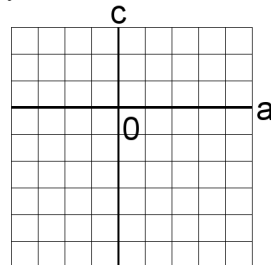
Systèmes Linéaires et Graphiques (D)

Trouvez la solution de chaque système d'équations à l'aide du graphique.

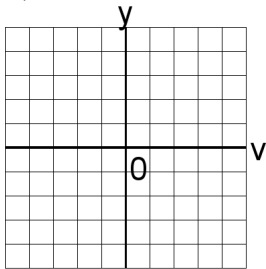
1. $5c + 2x = 24$
 $c + x = 6$



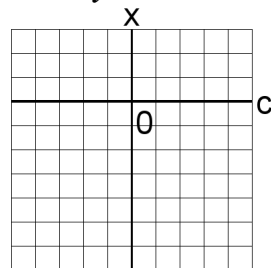
4. $5y + 6z = 51$
 $2y + 6z = 42$



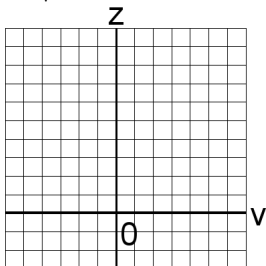
2. $6b + 5u = 56$
 $b + 4u = 22$



5. $6v + y = 36$
 $2v + 3y = 28$



3. $5a + 6c = 26$
 $3a + 6c = 18$



6. $2b + 5x = 38$
 $3b + 6x = 48$

