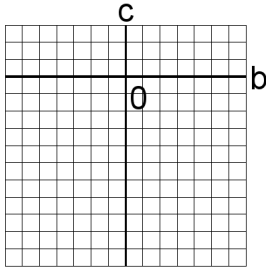


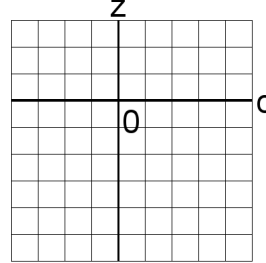
# Systèmes Linéaires et Graphiques (C)

Trouvez la solution de chaque système d'équations à l'aide du graphique.

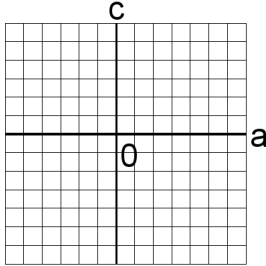
1.  $2c + 2y = 14$   
 $c + 2y = 12$



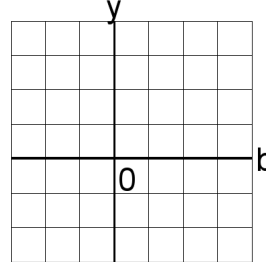
4.  $2a + 6z = 40$   
 $a + 5z = 30$



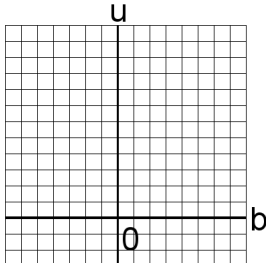
2.  $4c + 5z = 41$   
 $4c + 4z = 36$



5.  $v + 3x = 19$   
 $v + 4x = 25$



3.  $4v + 6x = 46$   
 $3v + 4x = 32$



6.  $b + 3u = 11$   
 $4b + 4u = 28$

