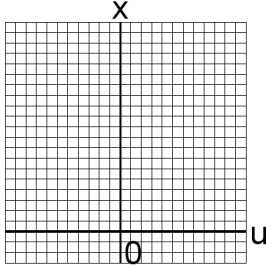


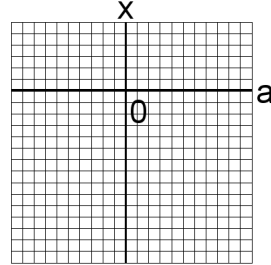
Systèmes Linéaires et Graphiques (A)

Trouvez la solution de chaque système d'équations à l'aide du graphique.

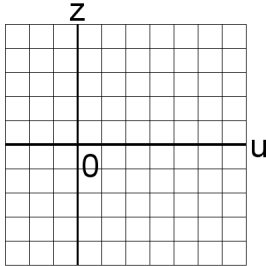
1. $4u + 5z = 31$
 $2u + z = 11$



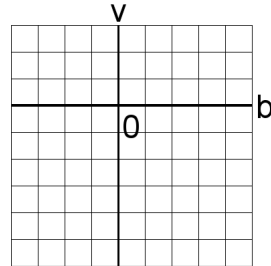
4. $4u + 5v = 34$
 $5u + 2v = 17$



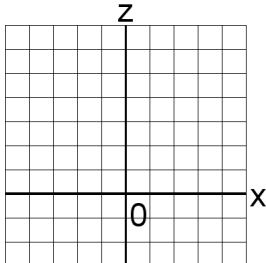
2. $5a + b = 34$
 $2a + 5b = 32$



5. $2x + 6y = 26$
 $5x + 4y = 32$



3. $2a + 2x = 20$
 $a + 4x = 25$



6. $6b + 6u = 54$
 $5b + 4u = 42$

