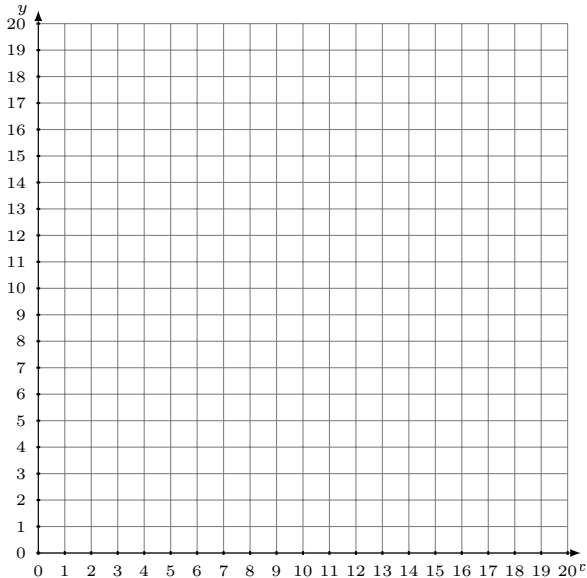


Représentation Graphique d'un Système d'Équations (G)

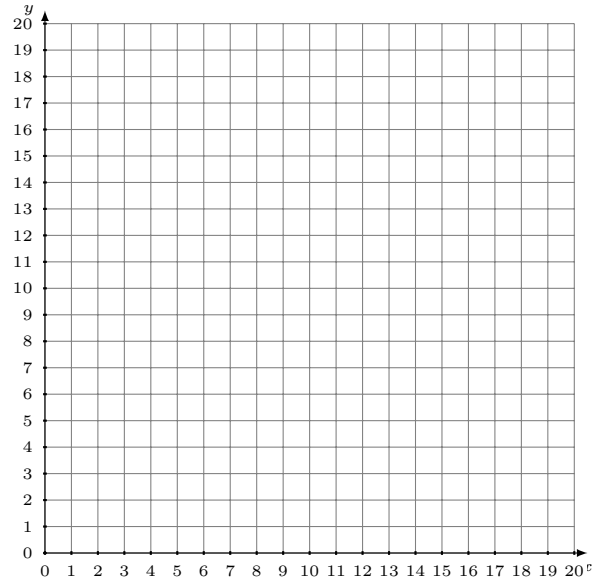
Représentez à l'aide d'un graphique chaque système et identifiez sa solution.

1.
$$y = \frac{7}{5}x$$
$$y = -\frac{9}{5}x + 16$$



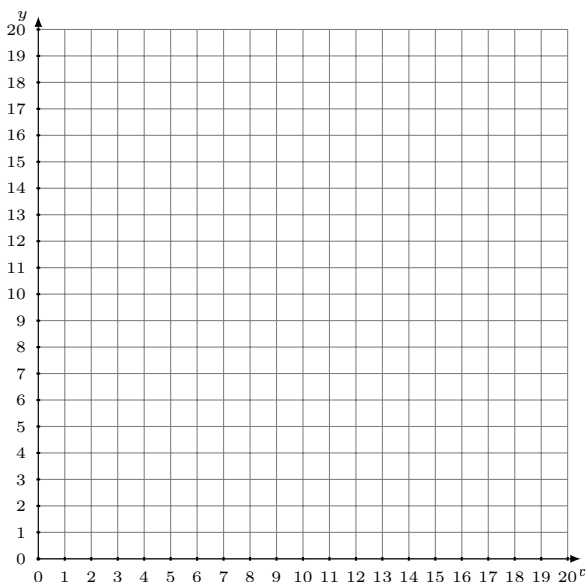
Solution: (----,----)

2.
$$y = \frac{7}{17}x + 3$$
$$y = \frac{10}{17}x$$



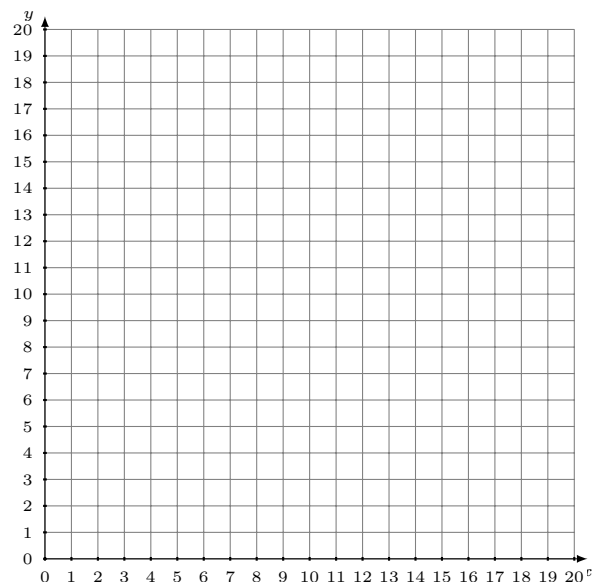
Solution: (----,----)

3.
$$y = x + 17$$
$$y = 9x + 9$$



Solution: (----,----)

4.
$$y = \frac{5}{12}x + 4$$
$$y = -\frac{1}{2}x + 15$$



Solution: (----,----)