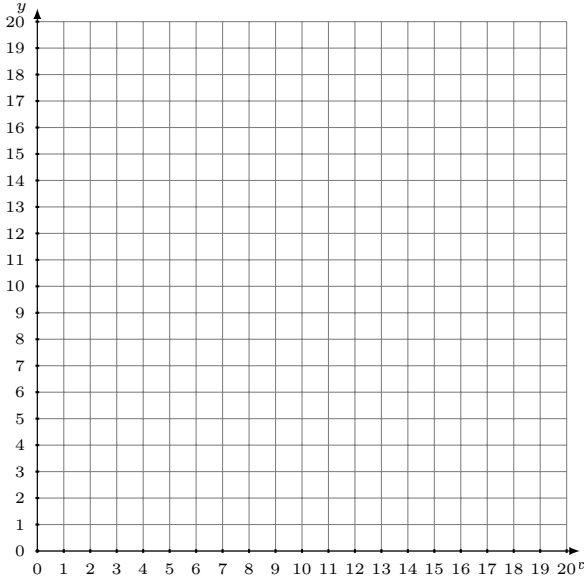


Représentation Graphique d'un Système d'Équations (C)

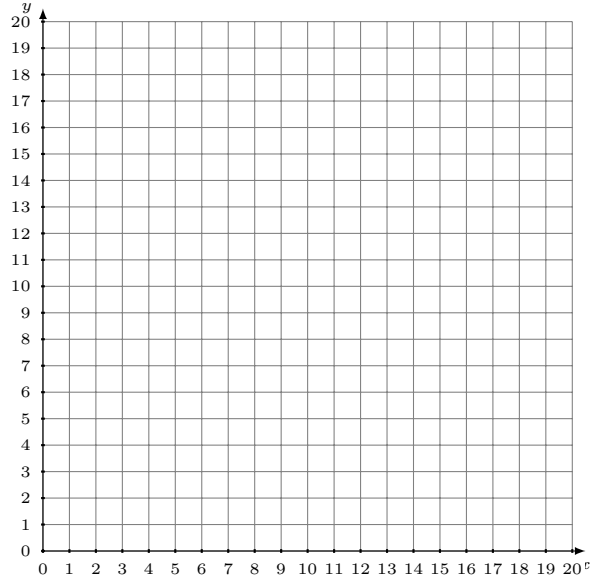
Représentez à l'aide d'un graphique chaque système et identifiez sa solution.

1.
$$y = -\frac{5}{19}x + 16$$
$$y = \frac{4}{19}x + 7$$



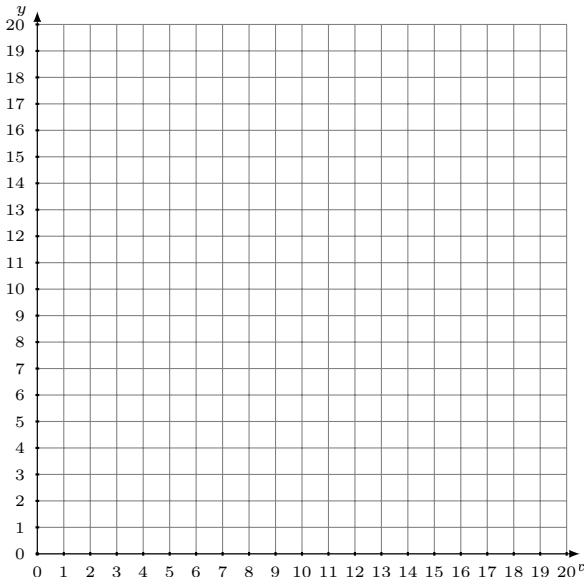
Solution: (----,----)

2.
$$5x + 11y = 187$$
$$y = \frac{7}{11}x + 5$$



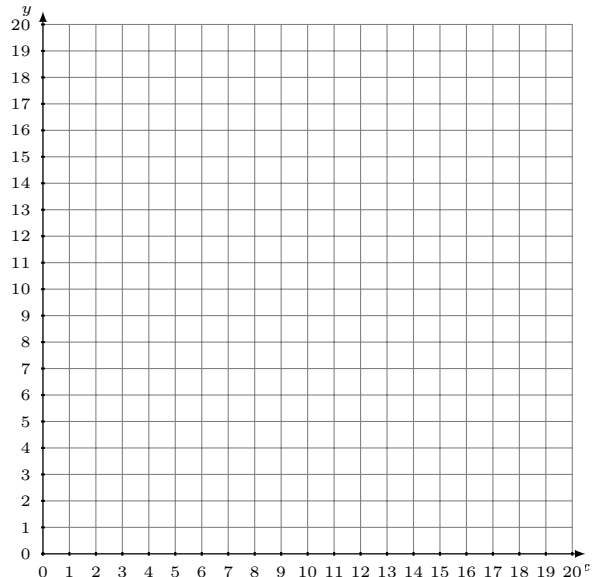
Solution: (----,----)

3.
$$2x - 7y = -63$$
$$y = \frac{13}{14}x$$



Solution: (----,----)

4.
$$y = -x + 8$$
$$3x - 4y = -4$$



Solution: (----,----)