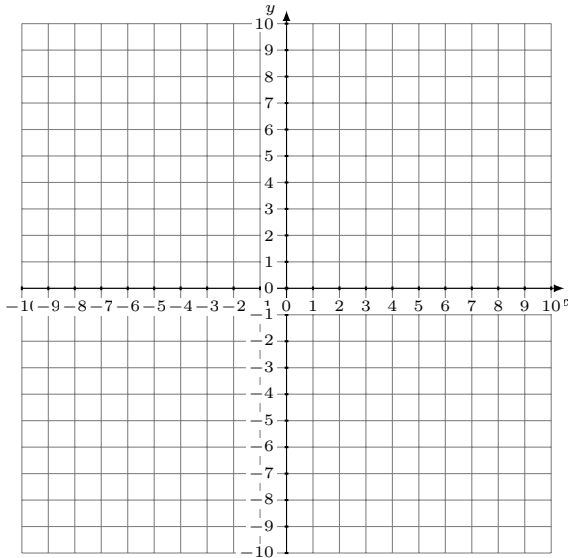


Représentation Graphique d'un Système d'Équations (G)

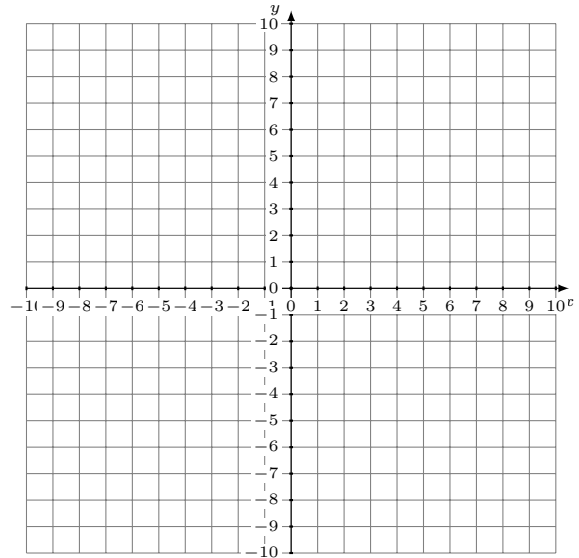
Représentez à l'aide d'un graphique chaque système et identifiez sa solution.

1.
$$y = -\frac{11}{3}x + 4$$
$$3x + y = 2$$



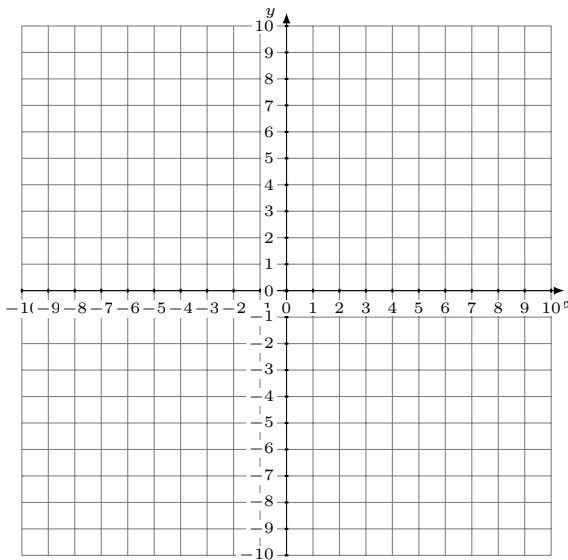
Solution: (----,----)

2.
$$2x + y = -1$$
$$y = -\frac{10}{3}x + 3$$



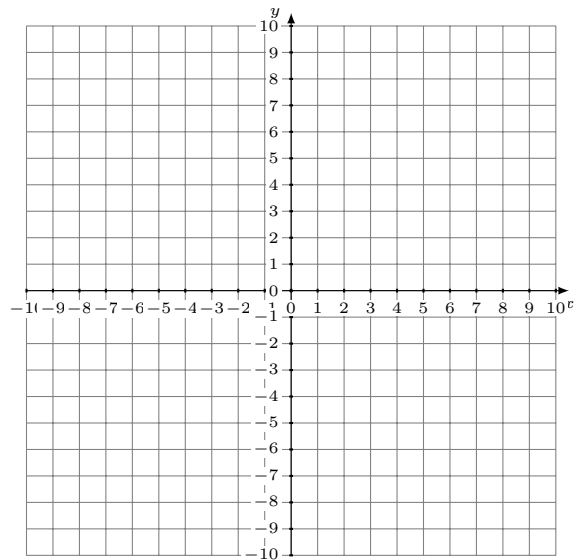
Solution: (----,----)

3.
$$y = \frac{6}{7}x$$
$$12x - 7y = 42$$



Solution: (----,----)

4.
$$y = \frac{3}{4}x + 8$$
$$y = -3x - 7$$



Solution: (----,----)