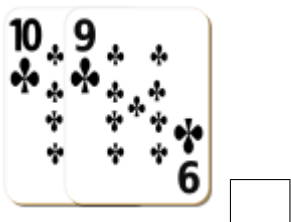
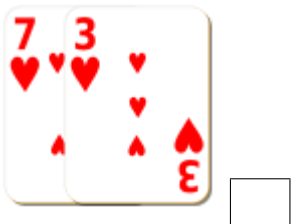


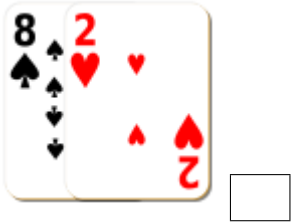


Addition de Cartes de Jeux (I)

Calculez la somme de chaque ensemble de cartes.



Addition de Cartes de Jeux (I) Solutions

Calculez la somme de chaque ensemble de cartes.




10



15



20



24



25



17



22



13



10



15



19



16