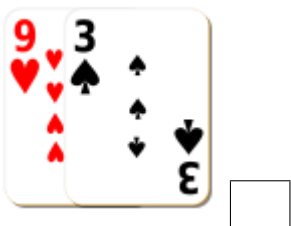

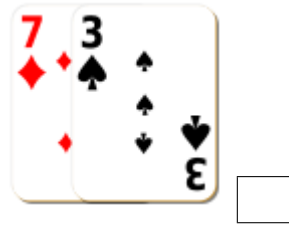
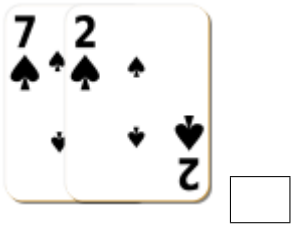


Addition de Cartes de Jeux (B)

Calculez la somme de chaque ensemble de cartes.



Addition de Cartes de Jeux (B) Solutions

Calculez la somme de chaque ensemble de cartes.



9



10



14



21



11



23



17



19



12



2



22



8